

Name: \_\_\_\_\_



## Understanding Place Value

Write the number in expanded form.

867

\_\_\_\_\_ + \_\_\_\_\_ + \_\_\_\_\_

693

\_\_\_\_\_ + \_\_\_\_\_ + \_\_\_\_\_

947

\_\_\_\_\_ + \_\_\_\_\_ + \_\_\_\_\_

462

\_\_\_\_\_ + \_\_\_\_\_ + \_\_\_\_\_

536

\_\_\_\_\_ + \_\_\_\_\_ + \_\_\_\_\_

265

\_\_\_\_\_ + \_\_\_\_\_ + \_\_\_\_\_


957

\_\_\_\_\_ + \_\_\_\_\_ + \_\_\_\_\_

164

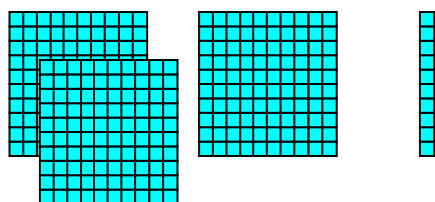
\_\_\_\_\_ + \_\_\_\_\_ + \_\_\_\_\_

Name: \_\_\_\_\_




# Understanding Three-Digit Numbers


Write how many hundreds and tens. Write the number.



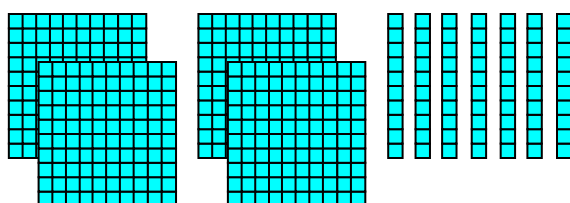
Hundreds	Tens	Ones

 \_\_\_\_\_

Hundreds	Tens	Ones

 \_\_\_\_\_

Hundreds	Tens	Ones

 \_\_\_\_\_

Hundreds	Tens	Ones

 \_\_\_\_\_

Name: \_\_\_\_\_



0	1	2	3	4	5	6	7	8	9
10	11	12	13	14	15	16	17	18	19
20	21	22	23	24	25	26	27	28	29
30	31	32	33	34	35	36	37	38	39
40	41	42	43	44	45	46	47	48	49

## Counting On Tens

Count by tens to add.

$16 + 10 = 26$

$23 + 20 = \underline{\quad}$

$36 + 10 = \underline{\quad}$

$20 + 15 = \underline{\quad}$

$31 + 10 = \underline{\quad}$

$18 + 30 = \underline{\quad}$

$8 + 20 = \underline{\quad}$

$10 + 19 = \underline{\quad}$

$24 + 10 = \underline{\quad}$

$12 + 30 = \underline{\quad}$

$30 + 15 = \underline{\quad}$

$20 + 12 = \underline{\quad}$

$6 + 20 = \underline{\quad}$

$17 + 30 = \underline{\quad}$

$33 + 10 = \underline{\quad}$

$14 + 10 = \underline{\quad}$

$10 + 17 = \underline{\quad}$

$20 + 11 = \underline{\quad}$