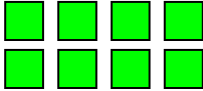


# Comparing Numbers

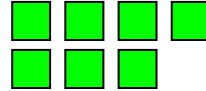
Count the objects in each group and write the number below them.  
Then circle which group has more.



---

---

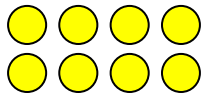
---



---

---


---



---

---

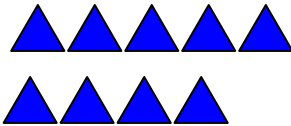
---



---

---

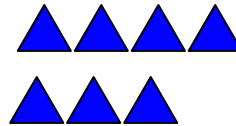
---



---

---

---



---

---

---



---

---

---







---

---

---

# Find the Pattern

Color the last two objects to continue the color pattern.



# Time

Draw the time on the analog clock that matches the digital clock.

