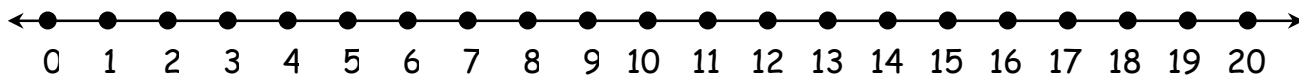


Name: \_\_\_\_\_



Ordering  
20



Write the number that comes before.

8

9 10

\_\_\_\_\_

15 16

\_\_\_\_\_

14 15

\_\_\_\_\_

19 20

\_\_\_\_\_

17 18

\_\_\_\_\_

13 14

\_\_\_\_\_

11 12

\_\_\_\_\_

18 19


\_\_\_\_\_

12 13

\_\_\_\_\_


8 9

Name: \_\_\_\_\_




Time to the  
Hour

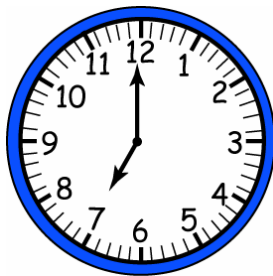
Write the time.



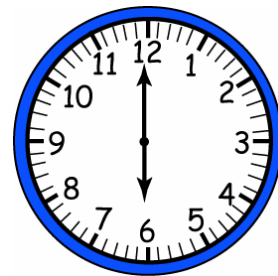
\_\_\_\_\_  
\_\_\_\_\_ o'clock



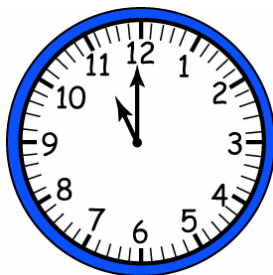
\_\_\_\_\_  
\_\_\_\_\_ o'clock



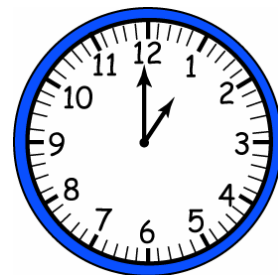
\_\_\_\_\_  
\_\_\_\_\_ o'clock



\_\_\_\_\_  
\_\_\_\_\_ o'clock




\_\_\_\_\_  
\_\_\_\_\_ o'clock




\_\_\_\_\_  
\_\_\_\_\_ o'clock

Name: \_\_\_\_\_




# Addition to 5


Write the numbers then add.




$$\begin{array}{c} \underline{\quad} \\ \text{-----} \\ \underline{\quad} \end{array} + \begin{array}{c} \underline{\quad} \\ \text{-----} \\ \underline{\quad} \end{array} = \begin{array}{c} \underline{\quad} \\ \text{-----} \\ \underline{\quad} \end{array}$$



$$\begin{array}{c} \underline{\quad} \\ \text{-----} \\ \underline{\quad} \end{array} + \begin{array}{c} \underline{\quad} \\ \text{-----} \\ \underline{\quad} \end{array} = \begin{array}{c} \underline{\quad} \\ \text{-----} \\ \underline{\quad} \end{array}$$



$$\begin{array}{c} \underline{\quad} \\ \text{-----} \\ \underline{\quad} \end{array} + \begin{array}{c} \underline{\quad} \\ \text{-----} \\ \underline{\quad} \end{array} = \begin{array}{c} \underline{\quad} \\ \text{-----} \\ \underline{\quad} \end{array}$$



$$\begin{array}{c} \underline{\quad} \\ \text{-----} \\ \underline{\quad} \end{array} + \begin{array}{c} \underline{\quad} \\ \text{-----} \\ \underline{\quad} \end{array} = \begin{array}{c} \underline{\quad} \\ \text{-----} \\ \underline{\quad} \end{array}$$